



Complete each number sentence.

1




$2 \times 3 = \underline{\hspace{2cm}}$

2




$3 \times 4 = \underline{\hspace{2cm}}$

3




$8 \times 3 = \underline{\hspace{2cm}}$

4




$3 \times \underline{\hspace{2cm}} = 21$

5



$\underline{\hspace{2cm}} \times 6 = 24$

6




$7 \times \underline{\hspace{2cm}} = 42$



Tell how to use your picture to solve the problem.


Use counters to model the problem. Draw a picture to show your work. Complete each number sentence.

1



$$15 \div 5 = \underline{\hspace{2cm}}$$

2



$$\underline{\hspace{2cm}} \div 6 = 5$$

3

$$9 \times \underline{\hspace{2cm}} = 72$$

4

$$16 \div \underline{\hspace{2cm}} = 4$$

5

$$49 \div \underline{\hspace{2cm}} = 7$$

6

$$48 \div \underline{\hspace{2cm}} = 8$$

7

$$36 \div \underline{\hspace{2cm}} = 4$$

8

$$54 \div \underline{\hspace{2cm}} = 9$$



Tell how you solved the problem.

Use an array to solve each problem.

①  $8 \div 4 = \underline{\hspace{2cm}}$

②  $6 \times \underline{\hspace{2cm}} = 18$

③  $\underline{\hspace{2cm}} \times 8 = 40$

④  $12 \div 3 = \underline{\hspace{2cm}}$

⑤  $6 \times 5 = \underline{\hspace{2cm}}$

⑥  $4 \times \underline{\hspace{2cm}} = 16$

⑦  $\underline{\hspace{2cm}} \times 5 = 20$

⑧  $27 \div 3 = \underline{\hspace{2cm}}$

⑨  $\underline{\hspace{2cm}} \times 9 = 36$

⑩  $42 \div 6 = \underline{\hspace{2cm}}$

⑪  $\underline{\hspace{2cm}} \times 8 = 48$

⑫  $63 \div 7 = \underline{\hspace{2cm}}$



Tell how you solved each problem.

**Solve.**

- ① Angelo has 18 black socks. How many pairs of black socks does he have in all?
  - ② Dad has 27 turnip plants in the garden. He has them in 3 equal rows. How many turnip plants are in each row?
- 
- ③ Brittany has 24 apples. She puts an equal number of apples in 6 tarts? How many apples are in each tart?
  - ④ Mom has 54 dollars. She spends it all on sandwiches for the party. Each sandwich is 6 dollars. How many sandwiches does she buy?

**Circle the letter for the correct answer.**

- ⑤ Mr. Gomez has to make 30 3-page packets. Each packet requires 1 staple. How many pages of paper and how many staples does he need?
  - a) 33 pages and 33 staples
  - b) 30 pages and 30 staples
  - c) 10 pages and 10 staples
  - d) 90 pages and 30 staples
- ⑥ Hudson has 2 full reels of fishing line. He has a total of 20 yards of line. There are 3 feet in a yard. How many feet of fishing line are on each reel?
  - a) 120 feet
  - b) 60 feet
  - c) 30 feet
  - d) 25 feet